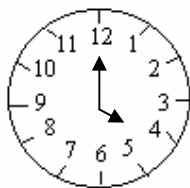
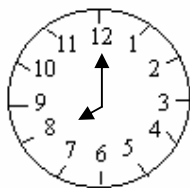


Time

- 60 seconds = _____ min.
- How many hands are there in a clock? _____
- How many numerals are there in the face of a clock? _____
- Draw the hands to indicate the following time.



4 O' clock



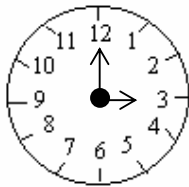
8 O' clock

- If the two hands of a clock lies in a straight line, then what time does the watch shows?

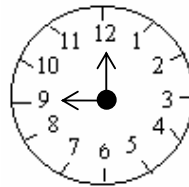
- How many divisions are there between two numbers in a clock? _____
- 3: 15 can also be said as _____
- 4: 45 can be said as _____ to five
- 100 years make one _____
- In a leap year, February has _____ days.
- A leap year has _____ days and it comes after every _____ years
- There are _____ months having 30 days.
- There are 7 months having _____ days.
- Write the time in another way:
a) 2 : 45 _____ b) 4 : 15 _____ c) 12 : 15 _____
- The smallest unit of time is _____
- The longer hand shows _____ on the face of a clock.
- Months, Weeks and days are the units to measure _____
- _____ is the special month of a year.
- _____ is the 3rd month of the year.

20. 45 minutes + _____ minutes = 1 hour.
21. The face of a clock/watch is called its _____
22. The month of August lies between _____ and _____ months.
23. A day is divided into morning, _____, _____ and night.
24. What day comes after Wednesday? _____
25. If 5th of a month is Sunday, then 10th of that month will be _____ day

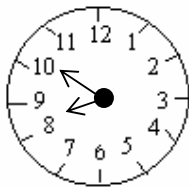
26 Read out the time from the following clocks.



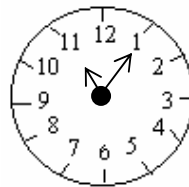
a) _____



b) _____

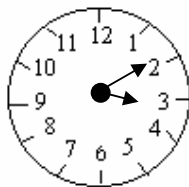


c) _____

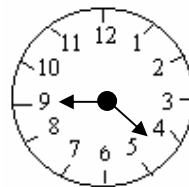


d) _____

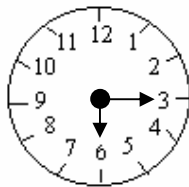
27 Draw the two hands to show the given time.



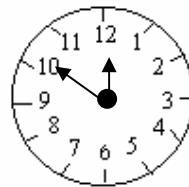
a) [3 : 10]



b) [4:45]



c) [6: 15]



d) [12:50]

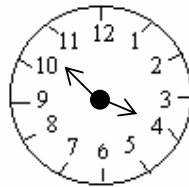
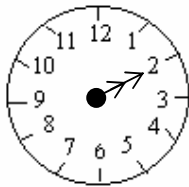
28 Write the following times using a.m. or p.m.

- a) 6:40 in the evening _____ b) 5:05 in the morning _____
c) 12:30 in the day _____ d) 11:55 in the night _____

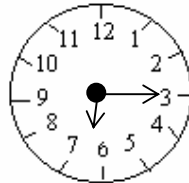
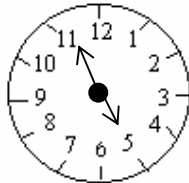
29 How many minutes have passed from clock A to clock B ?

Clock A

Clock B



a) _____



b) _____

30 How many minutes pass between

- a) 2 O' clock and quarter past 2 ? _____ b) Quarter to 6 and quarter past 6 ? _____

31. a.m. means _____ []

- a) all mighty b) after moon c) anti meridian d) none

32. The TV film starts at 5.30p.m. on Sunday. It runs for 2 hrs 15 min. At what time does it end? []

- a) 7.30 p.m. b) 8.45 p.m. c) 7.45 p.m. d) 8.00 p.m.