

Dr .KKR 's Gowtham Educational Institutions-AP.

Social studies pre final paper -I

Class -x

(maximum marks :50).

Time: 2.45 Hrs.

Section : I.

1. Answer all the questions.

2.Each question carries $\frac{1}{2}$

Mark. $12 \times \frac{1}{2} = 6$

1.What is the criterion used to classify the countries in World Development Report brought out by the World Bank?

2. Expand I.B.R.D.

3. Identify the wrong statement and write it in the answer booklet.

- * Hill stations like Nainital and Raniket are located in Lesser Himalayas.
- * Pirpanjal and Mahabharata ranges are located in Greater Himalayas.
- * Outer Himalayas have different names in different regions.

4. Identify the wrongly matched pair and write it in the answer booklet.

Primary sector	Nature plays a dominate role.
Secondary sector	Disguised unemployment it is predominant
Teri Cheri sector	No production of goods directly

5. Give examples for any two cities that were situated on the banks of River Yamuna.

6. The relation between the items in the first pair is the same with those in the second pair. Find out the missed item of the second pair.


*. *Kudamkulam : Tamilnadu : Hiware Bazar : ? .*

7. Census is about to start in India soon. 'A' says that this census shows age structure, gender ratio and literacy rate. 'B' says that it shows the size and density of population. Who is correct of these two?

- * A only *B only * Both A & B

8. Population of a city 'X' is 8lakhs at present. How much population to be increased so that 'X' can be called a metropolitan city?

9. Which option in the Box-B best signifies the cartoon in the Box-A?

BOX - A	BOX - B
	<ul style="list-style-type: none"> • <i>MNCs set up factories in poor countries to help them.</i> • <i>MNCs set up factories in regions where they can get cheap labour and other resources.</i> • <i>MNCs set up factories in regions where labourers demand for better conditions and higher wages.</i>

10. Poorest of the poor have a provision to get 35 kgs of grains per month under PDS. Name card related to this.

11. "The ocean gets heated and cooled more slowly than land" –Based on this information, mention any two cities which record low 'temperature differences'

12. Identify and write the place which is more nearer to the equator.

* *Trivandrum*

* *Kanyakumari*

* *Chennai*

Section -II

Note : 1. Answer all the questions.

2. Each question carries 1 Mark.

8 x 1 = 8

13. How is working capital different from physical capital?

14. Beginning of the agriculture had brought about many changes in human life styles. Mention one such important change.

15. Gandhi says “earth provides enough to satisfy every man’s needs, but not every man’s greed”. Which function of the environment can be associated with this quotation?

16. It is better to ban the use of plastic carry bags. Do you agree with this statement? Write your opinion.

17. Mention any two causes of environmental pollution in your area.

18. Write a slogan on food security.

19. Plot the below information on a bar graph (rough).

Year	Cultivated area (in million hectares)
2000	140
2010	140

20. Observe the below world map which is prepared on the basis of population.



Q: Asian continent looks the largest in the above map. Why.?

section -III

1. Answer all the questions.

2. Each question carries 2 Marks.

8 x 2 = 16

21. More than half of the workers in the country are working in the agriculture sector, producing only one-sixth of the GDP. What can we infer from this?

22. Explain the hardships that are likely to be faced in international migration.

23. Mention the tributaries of the River Ganga flowing towards north and south.

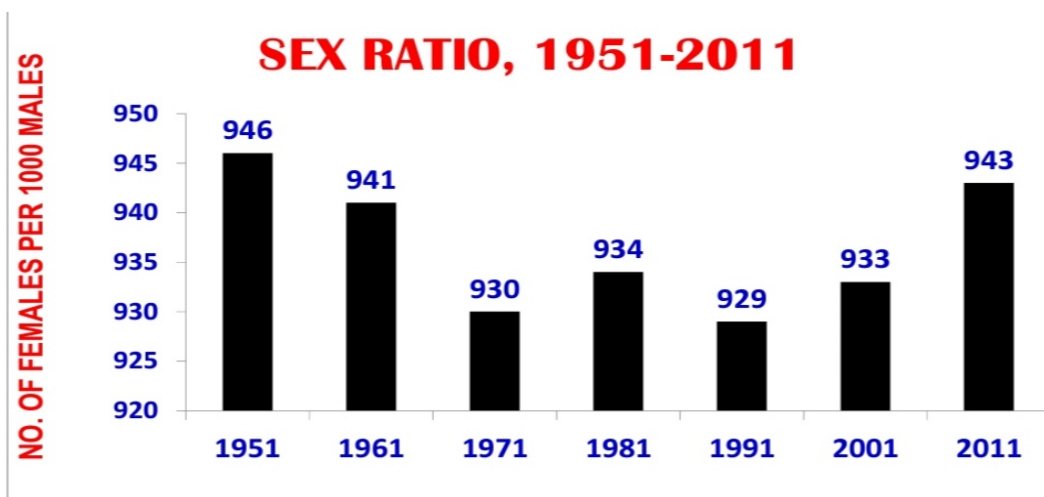
24. Match the items under list A with those under list -B.

<i>List-A</i>		<i>List -B</i>	
1.	Tapati	a.	Mahabaleshwaram
2.	Narmada	b.	Amarkantak
3.	Godavari	c.	Multai
4.	Krishna	d.	Nashik.

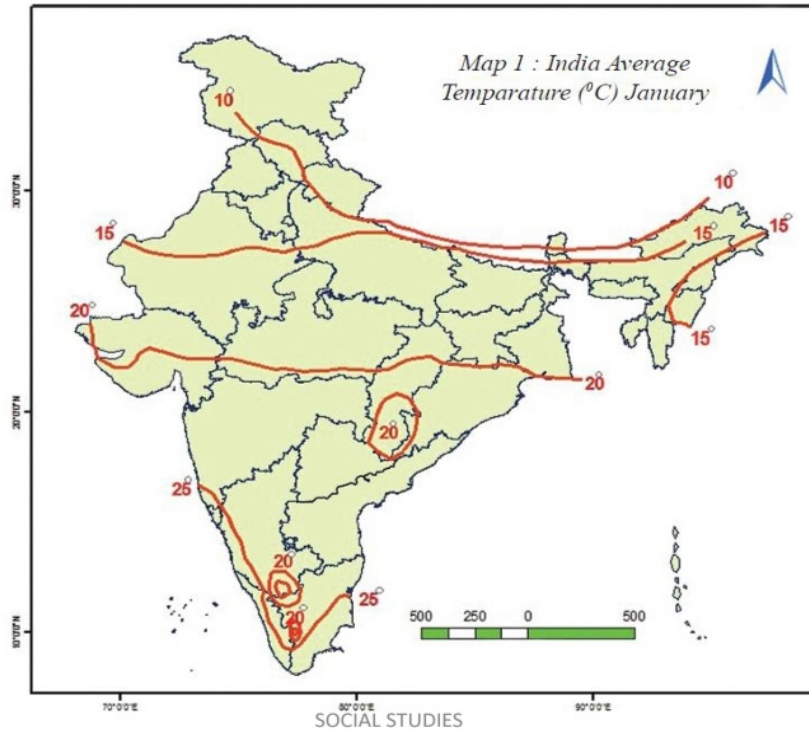
25. Mention any four important aspects that attracted you about the schooling revolution in Himachal Pradesh.

26. How is organic farming useful? Explain.

27.. Observe the graph given below and write your observations.



28. Based on the map given below, mention the states which record average temperature 15 degrees in month of January.



SECTION -IV

Note : 1. Answer all the questions.

2. Each question has internal choice.

3. Each question carries 4 marks.

5 x 4 = 20

29. a. Explain about the structural features of the Thar Desert.

(Or

b) What are the similarities and differences between the impacts of Internal and International migration?

30. a). "Gender bias is still prevailing in India. But it is gradually decreasing" –Do you agree with this? Justify your opinion.

(Or)

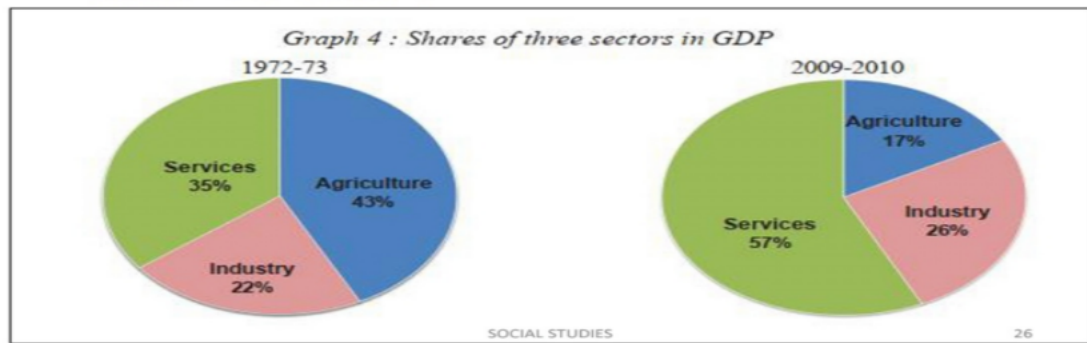
b). "Public Distribution System" is very helpful in providing food security" . Comment.

31.a. We are rapidly extracting minerals and other resources at present. Explain how would this affect the future development prospects?

(or)

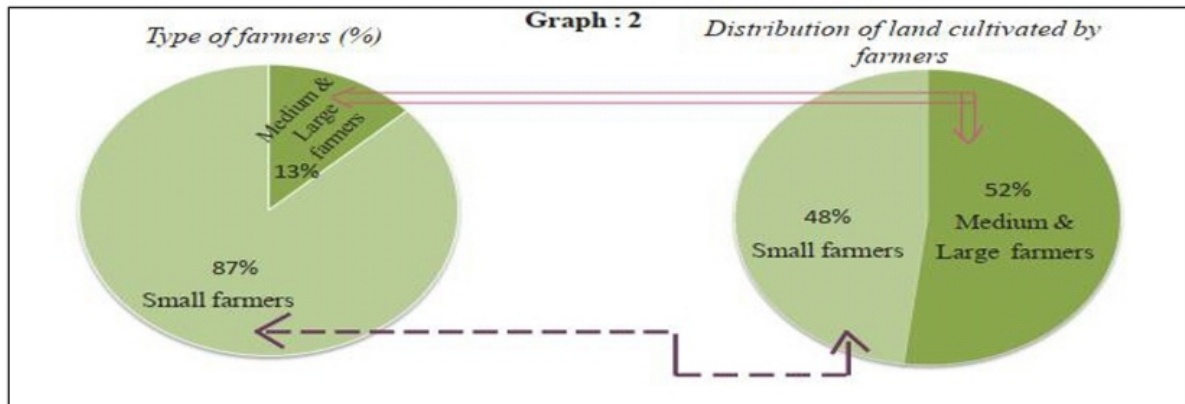
b. Explain the impact of globalisation in India.

32. a.) *Make a table that shows the information given in the below "Pie Chart".*



(Or)

32.b. Analyze the graph given below.



33. Mark the following on the outline map of India.

Group A

1. Canara Coast
2. The Plateau that is rich in mineral recourse.
3. The largest peninsular river.
4. The youngest folded mountains.

Group -B

1. Lakshadweep Islands .
2. River Tapati .
3. Panaji .
4. Indira Point.

***** *All the best******