

Dr.KKR's Gowtham Educational Institution AP.

Social studies pre final paper 2

Class: X.

(Maximum marks: 50.).

Time: 2:45Hrs.

SECTION -I

Note : 1. Answer all the questions.

2. Each question carries $\frac{1}{2}$ Mark.

12 x $\frac{1}{2}$ = 6

1. Which of the following is one of the consequences of the 'secret alliances' in the context of World Wars in Europe?

*Accumulation of capital

*Appeasement of Hitler

*Armed peace


*Aggressive nationalism

2. "This began around the end of 1929 and lasted almost till 1939 when the Second World War began. During this decade there was a worldwide economic decline triggered by a decline in demand and fall in prices" –What was the economic crisis described here called?

3. During May 4th movement, the young Chinese wanted to fight against some old traditional practices. Give one example for such tradition.

4. From the 16th century, the region of river Niger was a major source of _____ for America.

5. The picture given below is the logo of which international organisation?

LOGO	INTERNATIONAL ORGANISATION
	?

6. Some famous books and their authors are given below. Find out the the wrongly matched pair.

BOOK	AUTHOR
<i>Animal Farm</i>	<i>George Orwell</i>
<i>The Rise and Fall of the Third Reich</i>	<i>W. Shirer</i>
<i>Silent Spring</i>	<i>Rachel Carson</i>
<i>Pakistan or the partition of India</i>	<i>Muhammad Ali Jinnah</i>

7.. The relation between the items in the first pair is the same with those in the second pair. Find out the missed item of the second pair.

*. Vietnam: France;. India:. ?.

8. Which of the following statements is/are true?

i) Right to Information Act was passed in 2005 by the central government.

ii) This law permits the governments not to disclose the information received in confidence from foreign governments

* i only * ii only * both i and ii * None of the two

9. In which state the Anti -Hindi agitation started?

10. What does Article 356 of our constitution speak about?

11. Based on the information given below, answer the question that follows.

Beginning of the first world war	Russian revolution	Treaty of Versailles.	Rise of Hitler	Break out of World war 2	Germany invention of USSR	Formation of UNO
1914	1917	1919	1933	1939	1942	1945

Q. Mention the country which withdrew from the World War I before the War ends.

12. Arrange the following countries from west to east based on their location on World Map.

China, Austria, Japan. , India.

Section-II

Note: 1. Answer the following questions.

8 x1= 8

2. Each question carries 1 mark.

13. What was the role of PottiSriramulu in the formation of Andhra state?
14. What were the 'three Rs' in the 'New Deal' proposed by Roosevelt?
15. When and why did Gandhiji write a letter to Hitler?
16. During their rule in Vietnam, the French opposed the policies that would give full access to Vietnamese to education. All the colonial rulers acted in the same way in their colonies

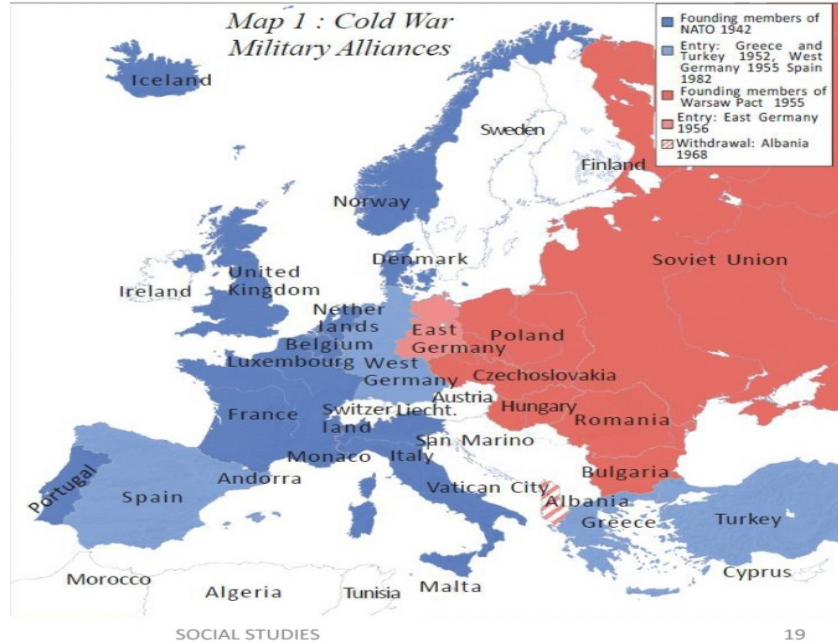
What might be the reason for this? Write your opinion.

17. Name the two newly formed union territories of India.
18. Write a slogan against the corruption.
19. Based on the information given below, answer the following question.

SOME OPPOSITION PARTIES OF 1970S:	
<i>Congress (O)</i>	<i>The conservative section of the Congress which had opposed the policies of Indira Gandhi.</i>
<i>CPI (M)</i>	<i>– Communist Party of India (Marxist) – a party with a national presence, which strove for radical land reforms, trade unionism and socialist policies.</i>
<i>DMK</i>	<i>Dravida Munnetra Kazagam – a party based mainly in Tamil Nadu which sought greater autonomy and powers for the state.</i>

Q. Mention the name of the party which has larger influence the Russian revolution.

20. Observe the map given below and mention any two member countries of NATO.



SECTION -III

Note : 1. Answer all the questions.

2. Each question carries 2 Marks.

8 x 2 = 16

21. Differentiate between Unitary and Federal governments.

22. Who is regarded as father of modern China? What were the 'three principles' of his programme?

23. Explain the causes for the failure of the League of Nations.

24. The name 'Pakistan' or 'Pak-stan' was coined by a Punjabi Muslim student at Cambridge, Choudhry RehmatAli. What do the letters in this name 'Pak-stan' stand for?

25. Mention the Constitutional provisions that facilitate social change.

26. Explain the role played by women in Anti arrack movement in the then Andhra Pradesh.

27. Based on the information given below, answer the following questions

War	Fought against	Year
Indo - Pak	Pakistan	1947 - 48
Operation Polo	Hyderabad	1948
Goa Liberation War	Portuguese	1961
Indo - China	China	1962
Indo - Pak	Pakistan	1965
Indo - Pak	Pakistan	1971
Kargil War	Pakistan	1999

i) What princely state mentioned here was annexed to India by military action?

ii) In which year was Bangladesh formed?

28. The following is the political map of India of the year 1999. Mention any two corrections to be made in it in accordance with the today's situation of India.



Section -iv

Note: 1. Answer all the questions.

5 x 4 = 20

2.Each question has internal choice.

3.Each question carries 4 Marks.

29.a. Explain about the Quit India movement.

(or)

b. Mention the different opinions of Marxist economists and economists like JM Keynes on causes and solutions of Great Depression.

30.a. Hitler said: "We do not consider it correct for the woman to interfere in the world of the man, in his main sphere" –How far are his words justifiable? Explain your opinion.

(or)

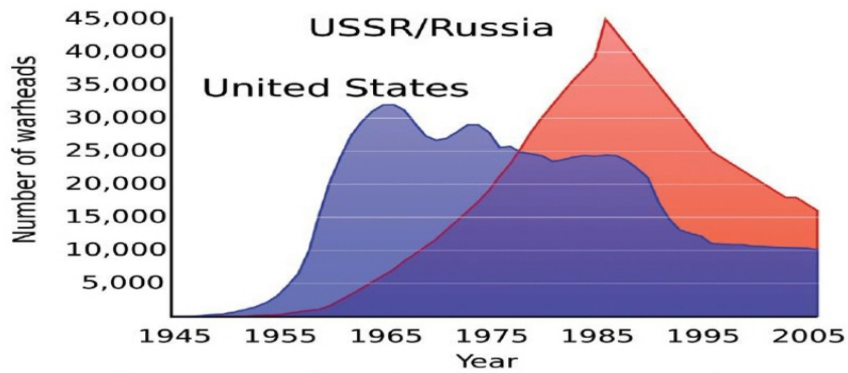
b. "Multy-party democracy creates favourable conditions for social movements of protest and change." –Do you agree with this statement? Support your answer with proper argument.

31.a. Explain India's relations with China.

(or)

b. Recently Supreme Court also came under the sphere of RTI Act. Explain the necessity of strengthening RTI Act in present day society.

32.a. Based on the information given in the below graph, mention any four aspects of Cold War.



Graph 1 : US and USSR nuclear stockpiles

(Or)

32. b. Based on the information given below, answer the following questions



i) Who won the Second World War?

ii) What was the immediate provocation of World War II?

iii) Mention the super power that suffered less due to the World War II.

iv) Name the person who was mainly responsible for the mass murder of the Jews.

33. Mark the following on the outline map of the world.

.Group -A

1. Bismarck wanted to isolate this country after defeating it in 1870.
2. The country in which the first Afro Asian conference was held.
3. The country in which the Head Quarters of UNO is located.
4. The first country in which socialist government was established.

(OR)

Group -B

1. Italy
2. Bangladesh
3. South Africa
4. Nigeria.

ALL THE BEST.